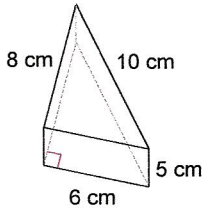
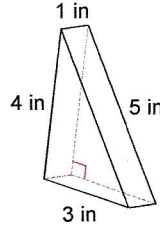


Find the volume of each figure. Round your answers to the nearest hundredth, if necessary.

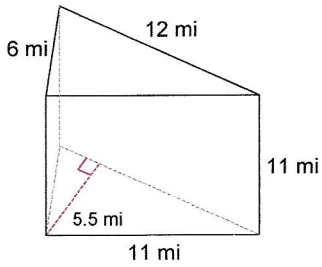
1)



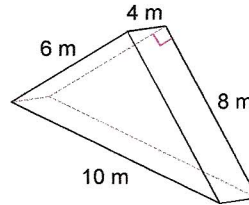
2)



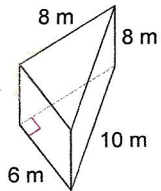
3)



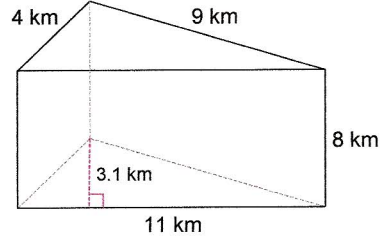
4)



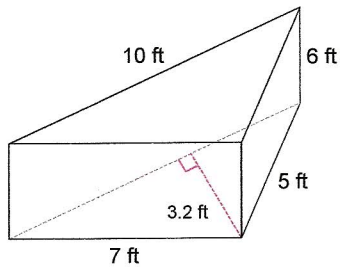
5)



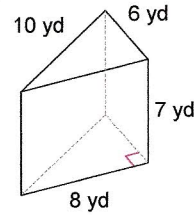
6)



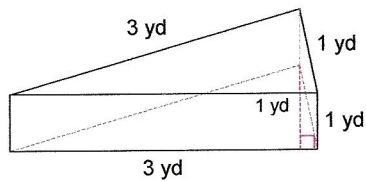
7)



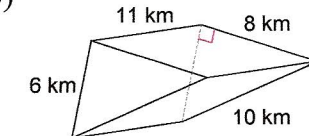
8)



9)



10)



## Answers to

1)  $120 \text{ cm}^3$

5)  $192 \text{ m}^3$

9)  $1.5 \text{ yd}^3$

2)  $6 \text{ in}^3$

6)  $136.4 \text{ km}^3$

10)  $264 \text{ km}^3$

3)  $363 \text{ mi}^3$

7)  $96 \text{ ft}^3$

4)  $96 \text{ m}^3$

8)  $168 \text{ yd}^3$