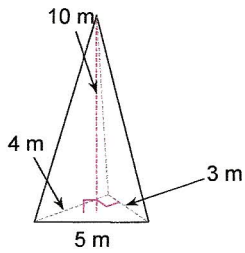
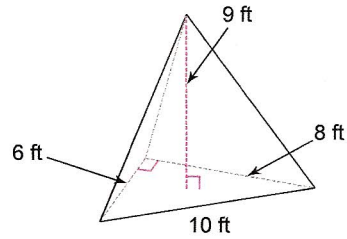


Find the volume of each figure. Round your answers to the nearest hundredth, if necessary.

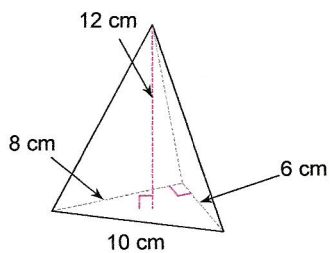
1)



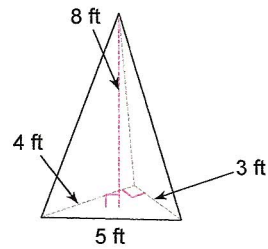
2)



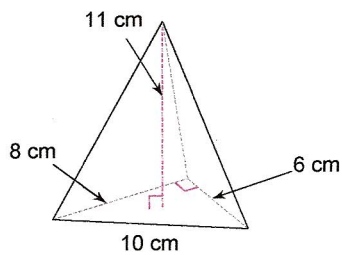
3)



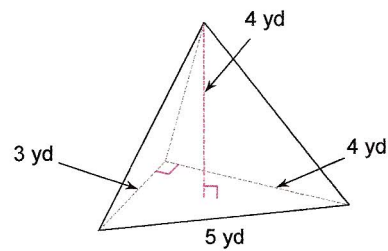
4)



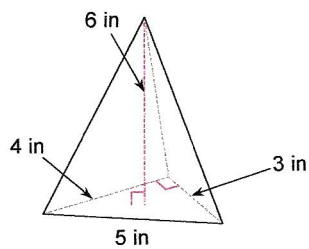
5)



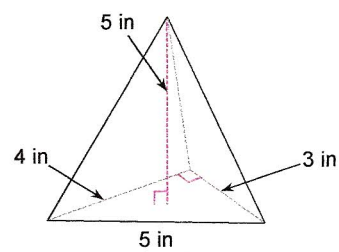
6)



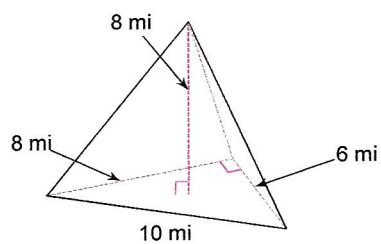
7)



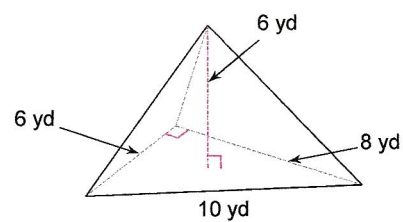
8)



9)



10)



## Answers to

- 1)  $20 \text{ m}^3$
- 5)  $88 \text{ cm}^3$
- 9)  $64 \text{ mi}^3$

- 2)  $72 \text{ ft}^3$
- 6)  $8 \text{ yd}^3$
- 10)  $48 \text{ yd}^3$

- 3)  $96 \text{ cm}^3$
- 7)  $12 \text{ in}^3$

- 4)  $16 \text{ ft}^3$
- 8)  $10 \text{ in}^3$