

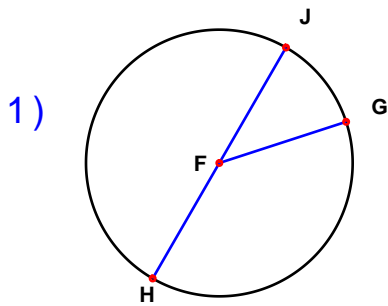
Name : \_\_\_\_\_

Score : \_\_\_\_\_

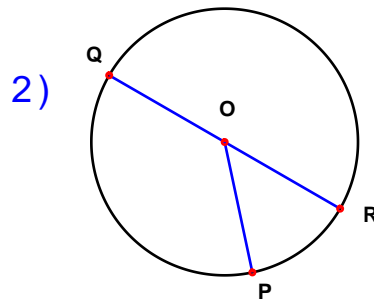
Teacher : \_\_\_\_\_

Date : \_\_\_\_\_

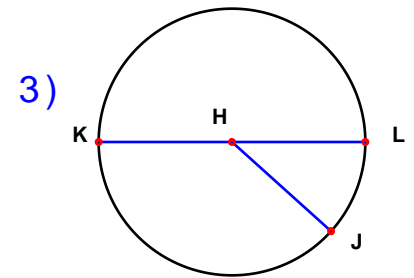
Solve the missing elements for each problem. Use 3.14 for  $\pi$ .



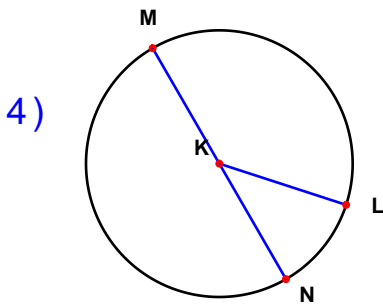
Radius: 12 inches  
Diameter: \_\_\_\_\_  
Circumference: \_\_\_\_\_  
Area: \_\_\_\_\_



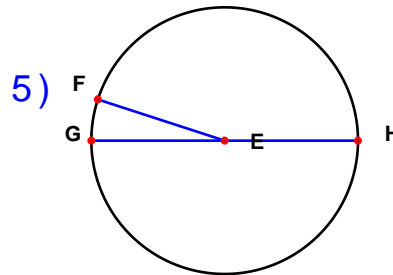
Radius: 14 inches  
Diameter: \_\_\_\_\_  
Circumference: \_\_\_\_\_  
Area: \_\_\_\_\_



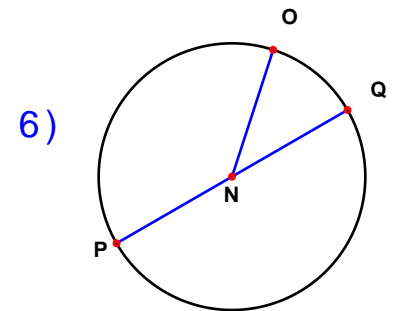
Radius: \_\_\_\_\_  
Diameter: 34 inches  
Circumference: \_\_\_\_\_  
Area: \_\_\_\_\_



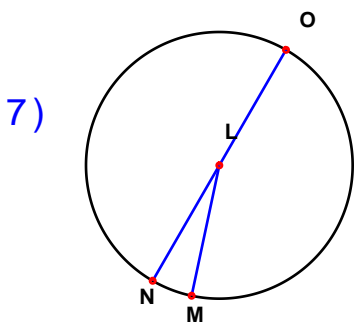
Radius: 18 inches  
Diameter: \_\_\_\_\_  
Circumference: \_\_\_\_\_  
Area: \_\_\_\_\_



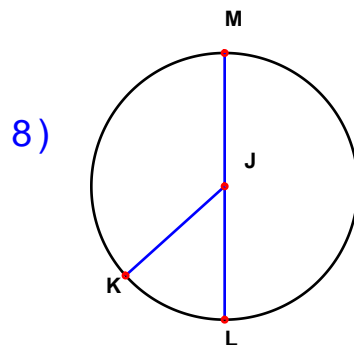
Radius: \_\_\_\_\_  
Diameter: 10 inches  
Circumference: \_\_\_\_\_  
Area: \_\_\_\_\_



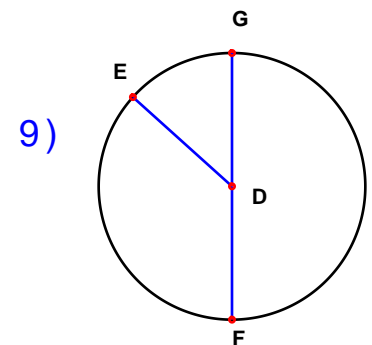
Radius: 2 inches  
Diameter: \_\_\_\_\_  
Circumference: \_\_\_\_\_  
Area: \_\_\_\_\_



Radius: 3 inches  
Diameter: \_\_\_\_\_  
Circumference: \_\_\_\_\_  
Area: \_\_\_\_\_



Radius: \_\_\_\_\_  
Diameter: 8 inches  
Circumference: \_\_\_\_\_  
Area: \_\_\_\_\_



Radius: \_\_\_\_\_  
Diameter: 38 inches  
Circumference: \_\_\_\_\_  
Area: \_\_\_\_\_



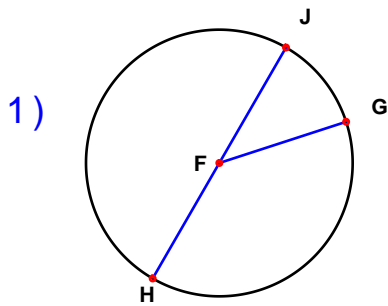
Name : \_\_\_\_\_

Score : \_\_\_\_\_

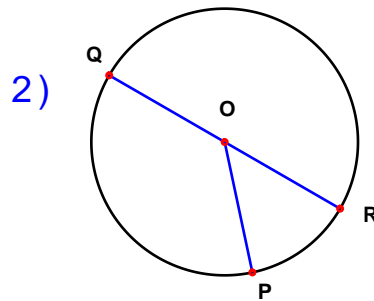
Teacher : \_\_\_\_\_

Date : \_\_\_\_\_

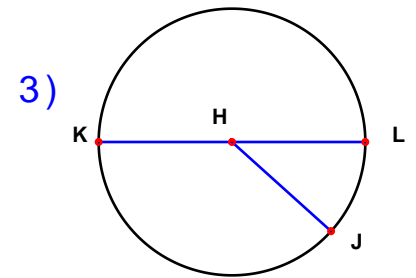
Solve the missing elements for each problem. Use 3.14 for  $\pi$ .



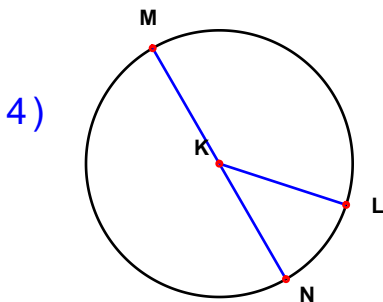
Radius: 12 inches  
Diameter: 24 inches  
Circumference: 75.36 inches  
Area: 452.16 inches



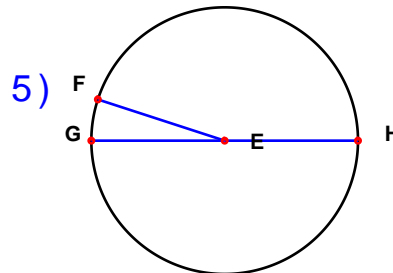
Radius: 14 inches  
Diameter: 28 inches  
Circumference: 87.92 inches  
Area: 615.44 inches



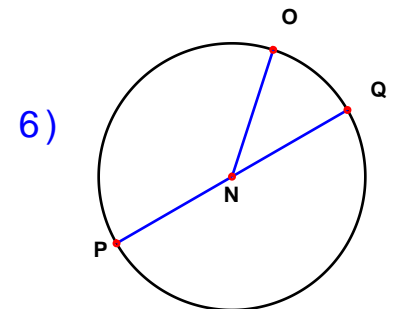
Radius: 17 inches  
Diameter: 34 inches  
Circumference: 106.76 inches  
Area: 907.46 inches



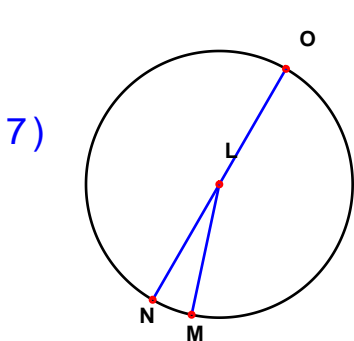
Radius: 18 inches  
Diameter: 36 inches  
Circumference: 113.04 inches  
Area: 1017.36 inches



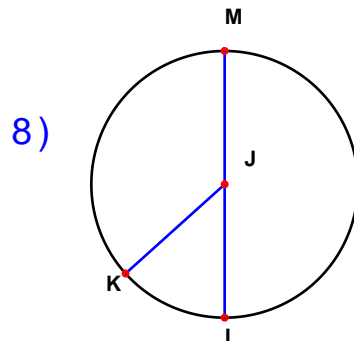
Radius: 5 inches  
Diameter: 10 inches  
Circumference: 31.4 inches  
Area: 78.5 inches



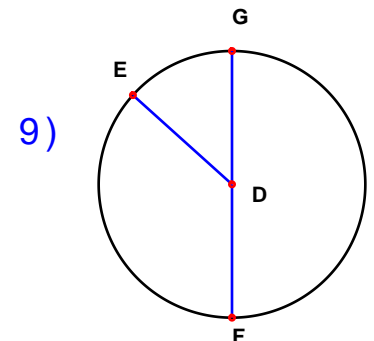
Radius: 2 inches  
Diameter: 4 inches  
Circumference: 12.56 inches  
Area: 12.56 inches



Radius: 3 inches  
Diameter: 6 inches  
Circumference: 18.84 inches  
Area: 28.26 inches



Radius: 4 inches  
Diameter: 8 inches  
Circumference: 25.12 inches  
Area: 50.24 inches



Radius: 19 inches  
Diameter: 38 inches  
Circumference: 119.32 inches  
Area: 1133.54 inches

