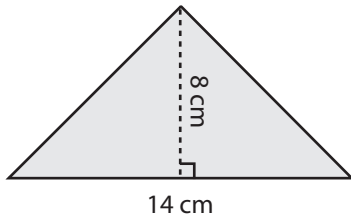


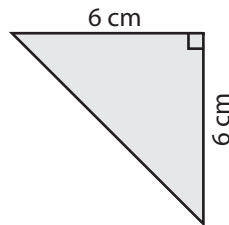
Triangle - Area

Find the area of each triangle.

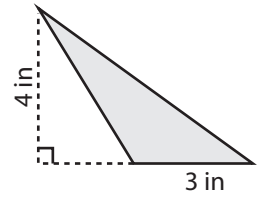
1)

Area =

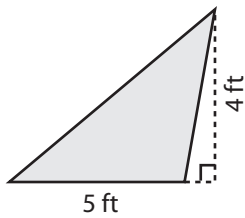
2)

Area =

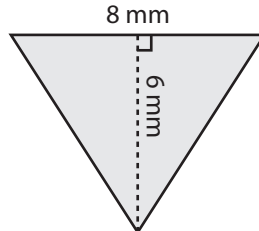
3)

Area =

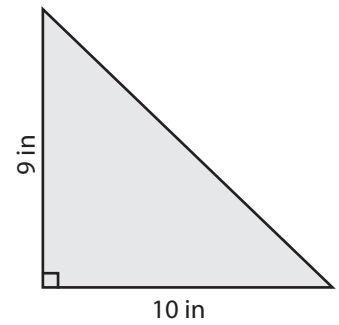
4)

Area =

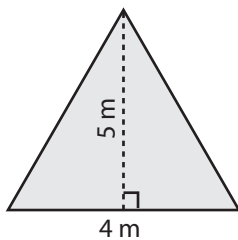
5)

Area =

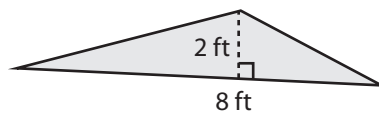
6)

Area =

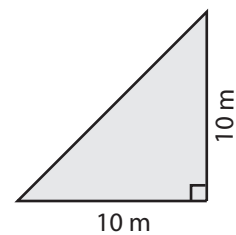
7)

Area =

8)

Area =

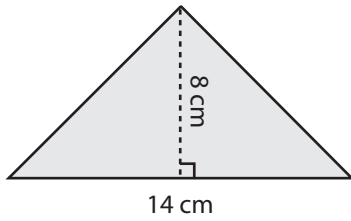
9)

Area =

Answer Key

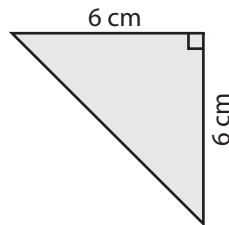
Find the area of each triangle.

1)



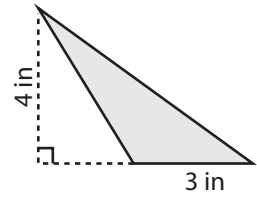
Area = **56 cm²**

2)



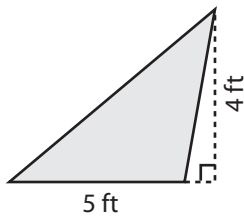
Area = **18 cm²**

3)



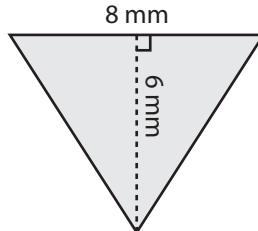
Area = **6 in²**

4)



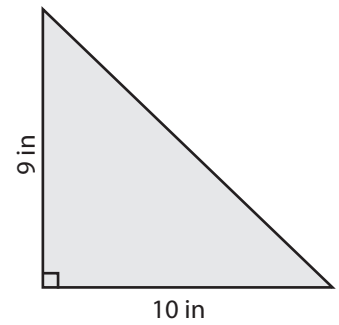
Area = **10 ft²**

5)



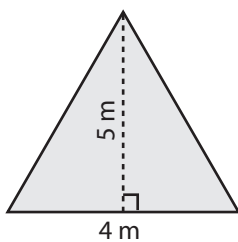
Area = **24 mm²**

6)



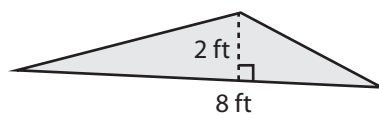
Area = **45 in²**

7)



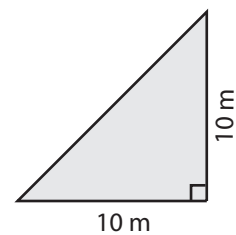
Area = **10 m²**

8)



Area = **8 ft²**

9)



Area = **50 m²**